
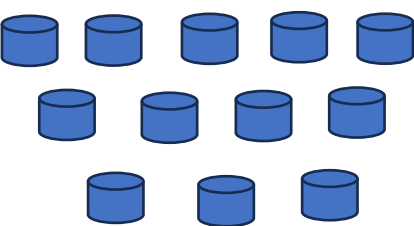









QUESTION BANK

Grade 1- MATHEMATICS

Chapter 4- Numbers from 10 to 99

Q.No.	Questions	Mark
1	<p>Write the number names.</p> <p>20 <input type="text"/></p> <p>46 <input type="text"/></p> <p><i>Answer:</i> Twenty, Forty six</p>	2
2	<p>Write the missing numbers.</p> <p></p> <p><i>Answer:</i> 50, 52</p>	2
3	<p>Count and write the numeral and the number name.</p> <p> <input type="text"/> _____</p> <p><i>Answer:</i> 12, Twelve</p>	2

4	<p>6. Circle the bigger number</p> <p>a) 25 37 b) 98 12</p> <p>Answer: a) 37 b) 98</p>	2
5	<p>Write the numbers that comes before.</p> <p> 32</p> <p>Answer: 31</p>	1
6	<p>Choose the correct answer.</p> <p>Fifty seven → 56 57 47</p> <p>Answer: 57</p>	1

7	<p>1. Write the numbers.</p> <p>a)  →</p> <p>b)  →</p> <p><i>Answer:</i> a) 63, b) 55</p>	2
8	<p>Write the missing numbers.</p> <p> <i>Answer:</i> 82, 84</p>	2
9	<p>Colour the star with smaller number.</p> <p></p> <p><i>Answer:</i> </p>	1